


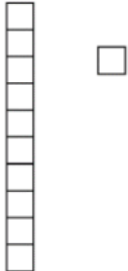

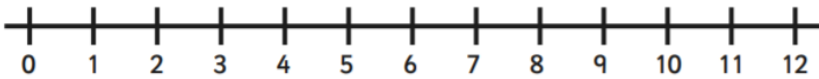





<p>Count these = _____</p> 	<p>Order these from smallest to largest</p> <p style="text-align: center;">17, 3, 12</p> <table border="1" style="margin: 10px auto; width: 150px; height: 50px;"> <tr><td></td><td></td><td></td><td></td><td></td><td></td></tr> <tr><td></td><td></td><td></td><td></td><td></td><td></td></tr> <tr><td></td><td></td><td></td><td></td><td></td><td></td></tr> </table>																			<p>Circle the longest</p> <div style="margin: 10px 0;">  </div> <div style="margin: 10px 0;">  </div>
<p>Match the number to the word</p> <div style="display: flex; justify-content: space-between; margin-bottom: 10px;"> Three 5 </div> <div style="display: flex; justify-content: space-between; margin-bottom: 10px;"> Five 3 </div> <div style="display: flex; justify-content: space-between;"> Nine 9 </div>	<p>Fill in the gaps</p> <p>1, 2, 3, _____, 5, _____</p>	<p>Fill in the gap</p> <p>10, 20, 30, _____, 50</p>																		
<p>How many?</p> 	<p>Order these from smallest to largest</p> <p style="text-align: center;">17, ten, 3</p> <p>_____</p>	<p>How much is here?</p> 																		
<p>12 - 4 = _____</p> 		<p>7 + 2 = _____</p> <div style="margin: 10px 0;">  </div> <div style="margin: 10px 0;">  </div>																		
<p>How much is here?</p> 	<p>10 - 4 = _____</p> 